












Hunter College, CUNY
 MUSTH 101—Music Theory Fundamentals
 Spring 2022

Name: _____

1. Draw lines connecting rhythmic values on the left with their corresponding rest values on the right.

2. Using quarter notes, write in the requested notes on this bass staff.













C# G F# Db Bb


Hunter College, CUNY
 MUSTH 101—Music Theory Fundamentals
 Spring 2022

Name: _____

1. Draw lines connecting rhythmic values on the left with their corresponding rest values on the right.

2. Using quarter notes, write in the requested notes on this bass staff.



C# G F# Db Bb