




## Homework Assignment #2—Treble Clef and Bass Clef

### Due Friday, February 4th


Name: \_\_\_\_\_

#### I. Treble Clef

- Another name for the treble clef is the...
  - C clef
  - F clef
  - Low clef
  - G clef
- The treble clef is used for instruments voices that tend to be in the **Higher** or **Lower** (circle one) register.
- Provide letter names for each of these notes on the treble staff (C, E, and G only).



- Provide letter names for each of these notes on the treble staff (all natural notes).



- After writing in a treble clef at the far left of this staff, write in close noteheads for each note requested.



C      a different C      F      E      G      a different G      B      A


#### II. Bass Clef

- Another name for the bass clef is the...
  - F clef
  - G clef
  - C clef
  - Middle clef



2. The bass clef is used for instruments voices that tend to be in the **Higher** or **Lower** (circle one) register.

3. Provide letter names for each of these notes on the bass staff (C, E, and G only).




\_\_\_\_\_

4. Provide letter names for each of these notes on the bass staff (all natural notes).



\_\_\_\_\_

5. After writing in a bass clef at the far left of this staff, write in close noteheads for each note requested.



D

E

B

a different  
B

F

a different  
F

C

a different  
C